


## ADDITION WORD PROBLEMS

### Grade 3



- Q1** A farmer planted 42 mango trees, then added 31 orange trees. How many trees are there in total?

ANSWER → \_\_\_\_\_ Trees



- Q2** Inside a box, there were 53 crayons. The teacher placed 24 more in it. What is the total count now?

ANSWER → \_\_\_\_\_ Crayons


- Q3** In a bakery, 61 cupcakes were sold in the morning, followed by 32 more in the evening. What is the total number sold?

ANSWER → \_\_\_\_\_ Cupcakes



## ADDITION WORD PROBLEMS

### Grade 3



**Q1**

With 54 stickers in her collection, a girl received 41 more as a gift. How many does she have now?



$$\square + \square = \square$$



**Q2** A book store initially stocked 73 notebooks, and later received 12 more. How many are there in total?



$$\square + \square = \square$$


**Q3** Inside a fish tank, there were 31 goldfish. The owner added 42 more. How many fish are in the tank now?



$$\square + \square = \square$$



# ADDITION WORD PROBLEMS



## Grade 3

- Q1** After receiving a new stock of 21 teddy bears, a toy shop's inventory increased from 62. What is the total number?

New Stock Of Teddy Bears



Old Stock Of Teddy Bears



+

Total Number Of Teddy Bears



| T | O |
|---|---|
|   |   |
|   |   |
|   |   |



- Q2** Students in a classroom made 42 more paper planes, adding to the 51 already there. What is the new total?

Existing Paper Plans



New Paper Plans



+

Total Number of Paper Plans



| T | O |
|---|---|
|   |   |
|   |   |
|   |   |

- Q3** On Monday, a gardener planted 33 rose plants, and on Tuesday, 44 more were added. How many were planted in total?

Rose Plants Planted on Monday



Rose Plants Planted on Tuesday



+

Total Number Of Plants



| T | O |
|---|---|
|   |   |
|   |   |
|   |   |

