


SUBTRACTION WORD PROBLEMS

Grade 3



- Q1** Teddy bears filled 82 shelves in a toy store. By closing time, 41 had been bought. How many still remain?

There are _____ Teddy bears remaining.

T	O

- Q2** A fruit stall displayed 91 bananas. By noon, customers had purchased 50. How many are left?

There are _____ Bananas left.

T	O

- Q3** The classroom was set up with 62 chairs. After rearranging, 31 were moved to another hall. How many are still in the room?

There are _____ Chairs in a room.

T	O



SUBTRACTION WORD PROBLEMS

Grade 3

- Q1** After picking 64 apples, Mia shared 31 with her neighbors. How many does she still have?



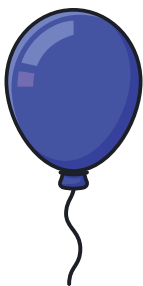
$$\square - \square = \square$$

- Q2** A farmer counted 72 cows in the morning. By evening, 41 had been moved to another farm. How many are left?



$$\square - \square = \square$$


- Q3** At a birthday party, 53 balloons decorated the room. After a strong wind blew 22 away, how many remained?



$$\square - \square = \square$$

SUBTRACTION WORD PROBLEMS

Grade 3



Q1

Noah had a collection of 84 marbles. He gifted 42 to his younger brother. How many are still with him?

ANSWER → _____ Marbles

Q2

A crowded train left the station with 72 passengers. At the first stop, 51 got off. How many remained on board?

ANSWER → _____ Passengers

Q3

The library once had 93 books on a special display. Over time, 42 were borrowed. How many books are left on the display?

ANSWER → _____ Books

